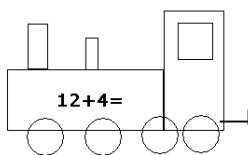
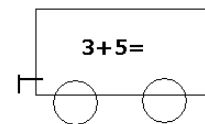
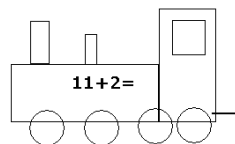
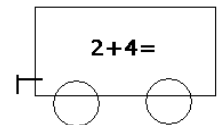
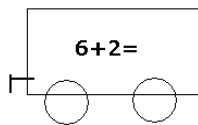
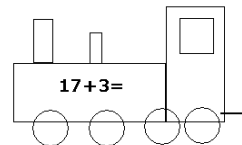
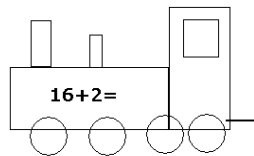
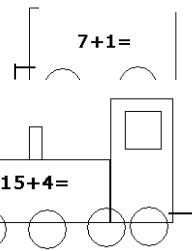
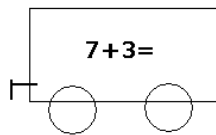
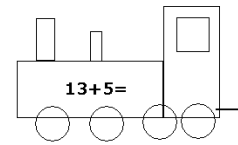
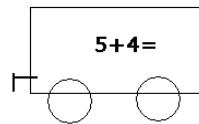
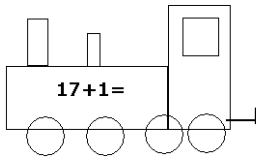


Knobelaufgaben Mai 2016

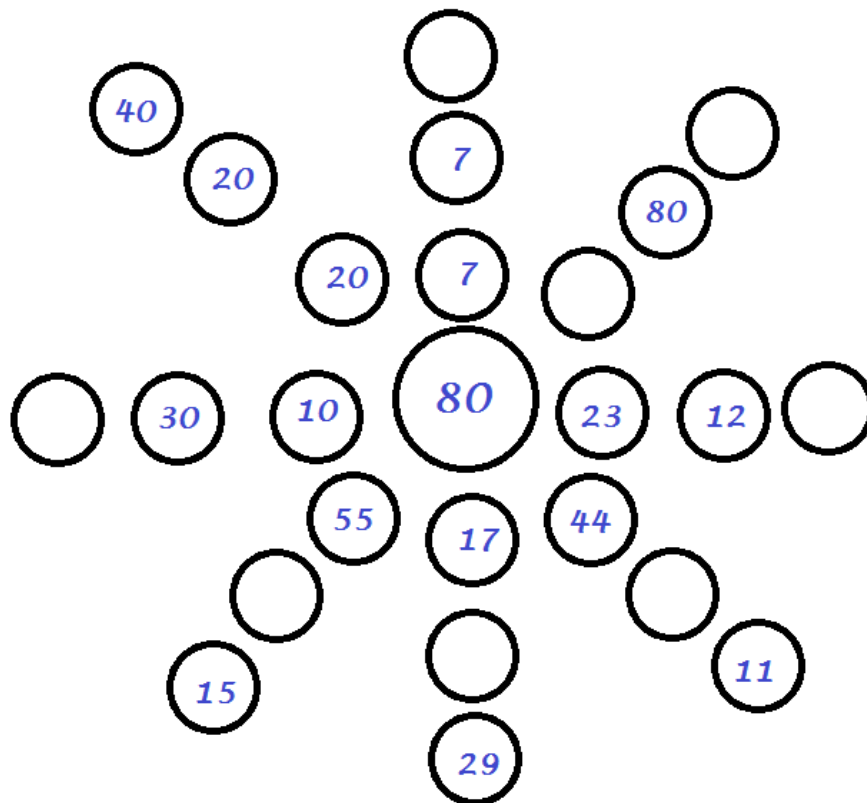
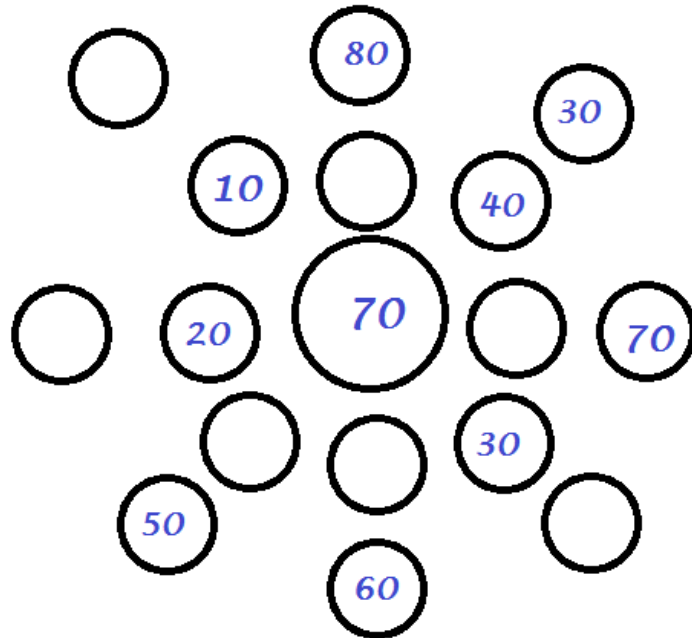
1. Klasse



Male die Lok mit dem passenden Hänger mit der gleichen Farbe aus.
Rechne dann die Aufgaben aus. Eine Lok bleibt übrig.

2. Klasse

Ergänze die Rechensterne.



3. Klasse

Ergänze die fehlenden Zahlen in den jeweiligen Reihen.

55ü, _____, _____, _____ 570, _____, _____

349, _____, _____ 352; 353, _____, _____

697, _____ 701, _____, _____, _____, 717

345, _____, 355, _____, _____, 370, _____, _____

661, 657 _____, _____, 345, _____, _____

100, 300, _____, 700, _____, _____

820, _____, _____, _____, 740, _____

4, 8, 16, _____, _____, _____, _____, _____, _____

4. Klasse

Ermittle die fehlenden Gewichtsangaben.

